





Use the array provided to solve each problem.


1) $20 \times 33 =$




2) $26 \times 20 =$




3) $24 \times 20 =$




4) $29 \times 20 =$



5) $20 \times 24 =$



6) $21 \times 20 =$



Answers

1. _____

2. _____

3. _____

4. _____

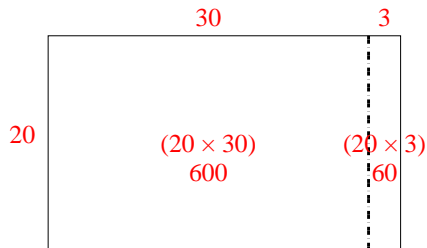
5. _____

6. _____

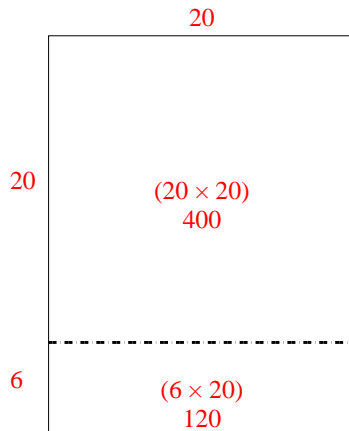


Use the array provided to solve each problem.

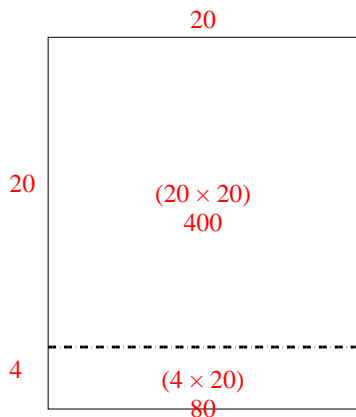
1) $20 \times 33 =$



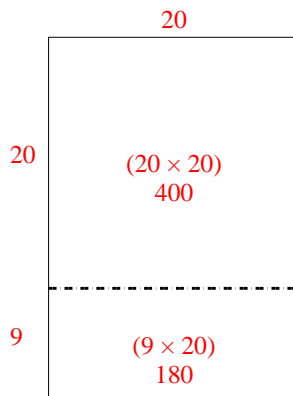
2) $26 \times 20 =$



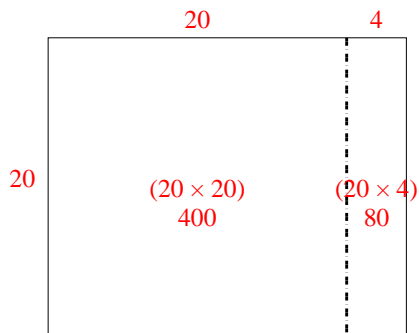
3) $24 \times 20 =$



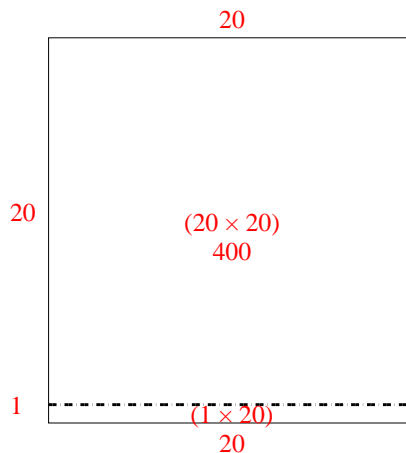
4) $29 \times 20 =$



5) $20 \times 24 =$



6) $21 \times 20 =$



Answers

1. 660
2. 520
3. 480
4. 580
5. 480
6. 420